

YEAR 3

PARTS OF A PLANT AND REQUIREMENTS FOR GROWTH:

01 – PLANT PARTS


Examine the plant.

Can you name each part?

**Can you describe the
role of each part?**

**Where does the food
for plants come from?**

YEAR 3
PARTS OF A PLANT AND REQUIREMENTS FOR GROWTH:
01 – PLANT PARTS



Examine the plants.

Describe the plants.

**How are they different?
How are they the same?**

**What do plants need
to stay healthy?**

YEAR 3

PARTS OF A PLANT AND REQUIREMENTS FOR GROWTH:

03 – UNHEALTHY

Examine the plants.

Describe the plants.

**How are they different?
How are they the same?**

**What has happened to make the plant unhealthy?
Could you make the plant healthy again? How?**

YEAR 3

PARTS OF A PLANT AND REQUIREMENTS FOR GROWTH:

04 – LIFE AND GROWTH

Look at the pictures.

**Which of these are essential
for plant life and growth?**

Why?

**What would happen if
a plant received no light?**

YEAR 3

PARTS OF A PLANT AND REQUIREMENTS FOR GROWTH:

04 – LIFE AND GROWTH

| | | |
|-----------------|----------------|-------------------|
| SOIL | AIR | POTS |
| COLD | WATER | FERTILISER |
| SUNLIGHT | COMPOST | SAND |
| WARMTH | SPACE | NUTRIENTS |

Examine the seeds.

What are seeds?

**How are they different,
how are they the same?**

**What do they need to begin to grow?
What is it called when seeds begin to grow?**

YEAR 3

PARTS OF A PLANT AND REQUIREMENTS FOR GROWTH:

06 – LIFE CYCLE

Look at the cards.

Can you put the cards in order?

What is happening in each part?

Where do seeds come from?

YEAR 3

PARTS OF A PLANT AND REQUIREMENTS FOR GROWTH:

06 – LIFE CYCLE




SEED




SPROUT




PLANT



VINE



BLOSSOM



MELON